


Name Jake

Date 1-9-14


Level 2 # 11

1043


Mable loves to ride her bike. She rode her bike 6 miles every day for 9 days. How many miles did she ride in all?




Groups of



An Array



Jumps on a number line



Equation

$$6 \times 9 = 54$$

The answer in a complete sentence

Mable rode her bike

54 miles in all.