


## Multiplication Rows and Columns

Name: \_\_\_\_\_ Class: \_\_\_\_\_

Write the multiplication sentences for the rows and columns.



\_\_\_\_\_ × \_\_\_\_\_ = \_\_\_\_\_  
\_\_\_\_\_ × \_\_\_\_\_ = \_\_\_\_\_



\_\_\_\_\_ × \_\_\_\_\_ = \_\_\_\_\_  
\_\_\_\_\_ × \_\_\_\_\_ = \_\_\_\_\_



\_\_\_\_\_ × \_\_\_\_\_ = \_\_\_\_\_  
\_\_\_\_\_ × \_\_\_\_\_ = \_\_\_\_\_



\_\_\_\_\_ × \_\_\_\_\_ = \_\_\_\_\_  
\_\_\_\_\_ × \_\_\_\_\_ = \_\_\_\_\_



\_\_\_\_\_ × \_\_\_\_\_ = \_\_\_\_\_  
\_\_\_\_\_ × \_\_\_\_\_ = \_\_\_\_\_




\_\_\_\_\_ × \_\_\_\_\_ = \_\_\_\_\_  
\_\_\_\_\_ × \_\_\_\_\_ = \_\_\_\_\_




\_\_\_\_\_ × \_\_\_\_\_ = \_\_\_\_\_  
\_\_\_\_\_ × \_\_\_\_\_ = \_\_\_\_\_



\_\_\_\_\_ × \_\_\_\_\_ = \_\_\_\_\_  
\_\_\_\_\_ × \_\_\_\_\_ = \_\_\_\_\_



\_\_\_\_\_ × \_\_\_\_\_ = \_\_\_\_\_  
\_\_\_\_\_ × \_\_\_\_\_ = \_\_\_\_\_



\_\_\_\_\_ × \_\_\_\_\_ = \_\_\_\_\_  
\_\_\_\_\_ × \_\_\_\_\_ = \_\_\_\_\_



\_\_\_\_\_ × \_\_\_\_\_ = \_\_\_\_\_  
\_\_\_\_\_ × \_\_\_\_\_ = \_\_\_\_\_



\_\_\_\_\_ × \_\_\_\_\_ = \_\_\_\_\_  
\_\_\_\_\_ × \_\_\_\_\_ = \_\_\_\_\_