



Name _____



Date _____



MUSIC MATH



Use the correct note values to complete the simple math problems below.



RESTS



 +  = _____



 +  = _____



 +  = _____



 +  = _____



 +  = _____

 +  = _____



 +  = _____



 +  = _____



 +  = _____



 +  = _____



NOTES



 +  = _____



 +  = _____



 +  = _____



 +  = _____



 +  = _____

 +  = _____

 +  = _____

 +  = _____

 +  = _____

 +  = _____