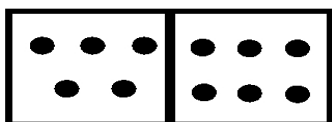


Addition and Subtraction Families

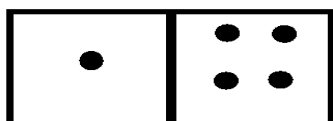
Name _____

Date: _____

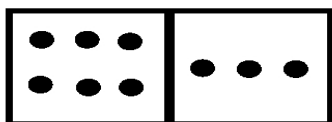
Write the equations for each picture.



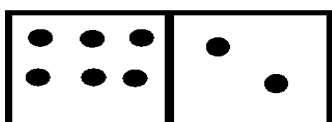
$$\begin{array}{r} 6 \\ + 5 \\ \hline 11 \end{array} \quad \begin{array}{r} 5 \\ + 6 \\ \hline 11 \end{array} \quad \begin{array}{r} 11 \\ - 6 \\ \hline 5 \end{array} \quad \begin{array}{r} 11 \\ - 5 \\ \hline 6 \end{array}$$



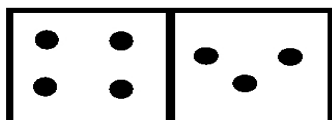
$$\begin{array}{r} + \quad \quad \\ \hline \end{array} \quad \begin{array}{r} + \quad \quad \\ \hline \end{array} \quad \begin{array}{r} - \quad \quad \\ \hline \end{array} \quad \begin{array}{r} - \quad \quad \\ \hline \end{array}$$



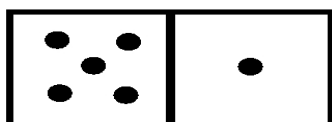
$$\begin{array}{r} + \quad \quad \\ \hline \end{array} \quad \begin{array}{r} + \quad \quad \\ \hline \end{array} \quad \begin{array}{r} - \quad \quad \\ \hline \end{array} \quad \begin{array}{r} - \quad \quad \\ \hline \end{array}$$



$$\begin{array}{r} + \quad \quad \\ \hline \end{array} \quad \begin{array}{r} + \quad \quad \\ \hline \end{array} \quad \begin{array}{r} - \quad \quad \\ \hline \end{array} \quad \begin{array}{r} - \quad \quad \\ \hline \end{array}$$



$$\begin{array}{r} + \quad \quad \\ \hline \end{array} \quad \begin{array}{r} + \quad \quad \\ \hline \end{array} \quad \begin{array}{r} - \quad \quad \\ \hline \end{array} \quad \begin{array}{r} - \quad \quad \\ \hline \end{array}$$



$$\begin{array}{r} + \quad \quad \\ \hline \end{array} \quad \begin{array}{r} + \quad \quad \\ \hline \end{array} \quad \begin{array}{r} - \quad \quad \\ \hline \end{array} \quad \begin{array}{r} - \quad \quad \\ \hline \end{array}$$

