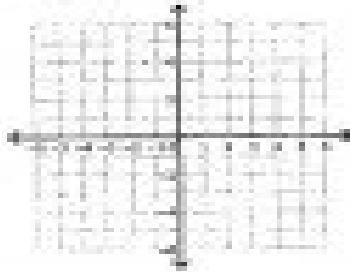
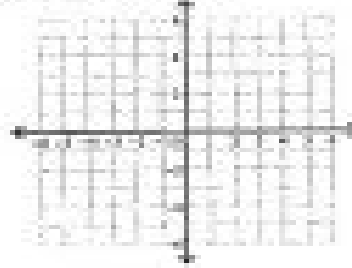


Graph these equations.


7. $y = 2x - 5$



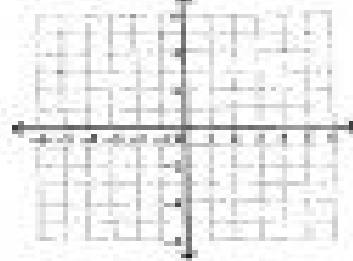
8. $y = \frac{3}{2}x - 1$




9. $y = 5x - 4$



10. $y = -2x + 5$



11. $y = -\frac{1}{2}x + 3$



12. $y = 2x$

