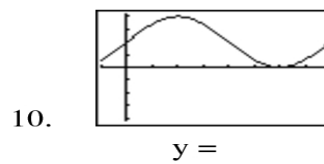
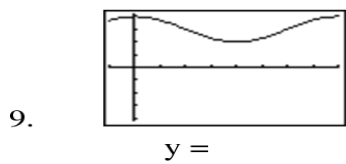
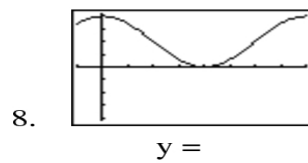
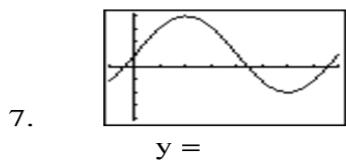
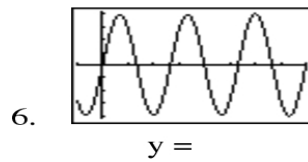
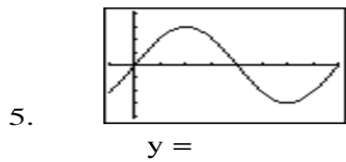
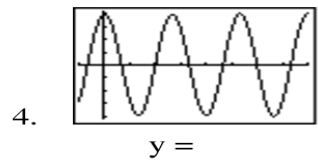
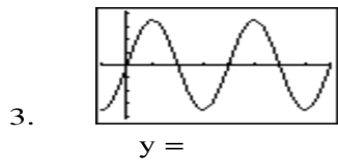
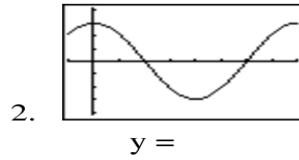
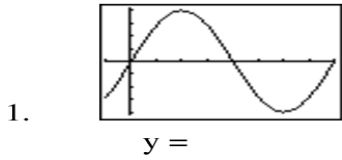


Identify the following graphs (1)



The WINDOW being used in all the examples is shown in the screenshot →

```

WINDOW
Xmin=-45
Xmax=45
Xscl=45
Ymin=-4.2
Ymax=4.2
Yscl=1
Yres=1
    
```