




Name \_\_\_\_\_

Date \_\_\_\_\_

**Daily Math Review for 4<sup>th</sup> Grade****Week 1**

Monday	<p>If you know <math>30 = 6 \times 5</math>, then 30 is 6 times as many as _____</p>	<p>Find the perimeter of the rectangle</p>  <p>_____</p>
	<p>Round to the nearest ten thousand</p> <p>24305</p> <p>_____</p>	<p>Solve</p> $\begin{array}{r} 657 \\ + 195 \\ \hline \end{array}$
Tuesday	<p>Anna read 5 books. If her brother read 3 times as many books, how many did he read?</p>	<p>Circle the name of the geometric figure</p>  <p>ray      point      line segment</p>
	<p>Circle each fraction that is equivalent to one half.</p> <p><math>\frac{1}{4}</math>    <math>\frac{2}{4}</math>    <math>\frac{3}{4}</math>    <math>\frac{5}{10}</math></p>	<p>Solve</p> $24 \times 8 = \underline{\hspace{2cm}}$
Wednesday	<p>Which would you prefer: one gallon of water or two 1/2 gallon bottles? If you don't know, ask your parents. The day how many more water does it need to work to better you?</p>	<p>Circle all shapes that contain at least one right angle</p> 
	<p>Compare using &gt;, &lt;, or =</p> <p><math>\frac{2}{10}</math>    _____    <math>\frac{7}{10}</math></p>	<p>Solve</p> $82 + 9 = \underline{\hspace{2cm}}$