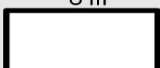


Name: _____

Area of a Rectangle

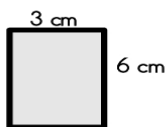
To find the area of a rectangle, multiply the length by the width.

example: 4 m  8 m area = $4\text{ m} \times 8\text{ m} = \underline{32\text{ square meters}}$

Find the area of each rectangle by multiplying.



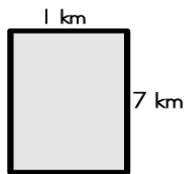
area = _____



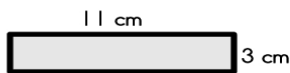
area = _____



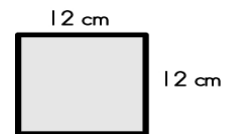
area = _____



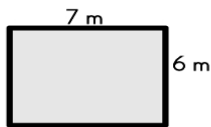
area = _____




area = _____



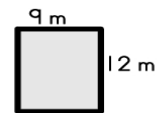
area = _____



area = _____



area = _____



area = _____