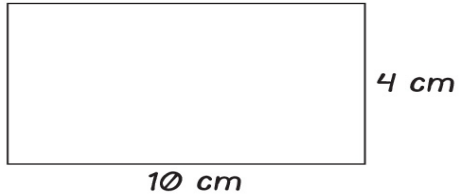


Name: _____ Date: _____

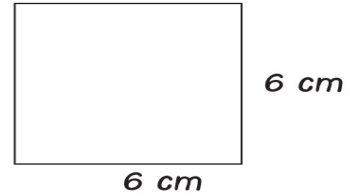
AREA AND PERIMETER

Find the perimeter and area of each figure.



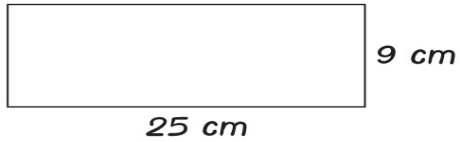
Area _____

Perimeter _____



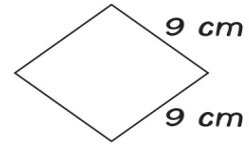
Area _____

Perimeter _____



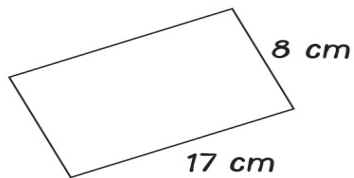
Area _____

Perimeter _____



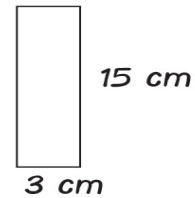
Area _____

Perimeter _____



Area _____

Perimeter _____



Area _____

Perimeter _____