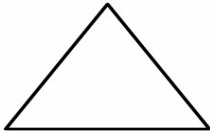


NAME THAT POLYGON!

Name _____ Date _____

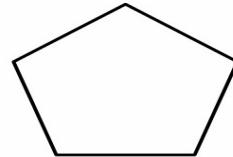
Can you name these polygons according to the number of their side?



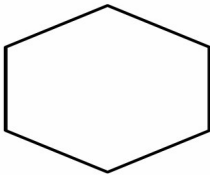
It's _____



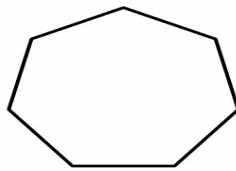
It's _____



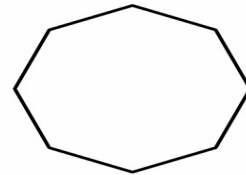
It's _____



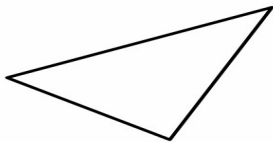
It's _____




It's _____



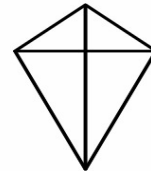
It's _____



It's _____



It's _____



It's _____