






Name \_\_\_\_\_

## Weather Instruments

Identify the names and functions of weather instruments.  
Match the weather instrument to the correct function.

- |    |   |             |                                    |
|----|---|-------------|------------------------------------|
| 1. |    | barometer   | a. measures temperature            |
| 2. |    | wind sock   | b. measures the speed of the wind  |
| 3. |    | thermometer | c. measures the amount of rainfall |
| 4. |  | anemometer  | d. measures air pressure           |
| 5. |  | rain gauge  | e. tells the direction of the wind |

What would an anemometer tell you about the weather?