


Name _____

Gas and Go

Measurement
Comparing lengths

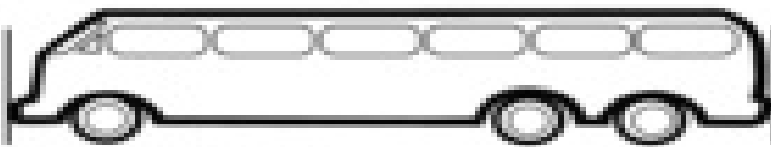
Measure each vehicle. Draw a line to the correct number.
 Color the vehicle that is shorter.




3




4



2




5



6



3



2



4

