



Name: \_\_\_\_\_

CCSS 2.G.1 Recognize and draw shapes having specified attributes, such as a given number of angles or a given number of equal faces.

## Shapes

 Directions: Draw the shapes described below.


1. Draw a shape with four equal faces.



What is the name of the shape you drew?

\_\_\_\_\_

2. Draw a shape with three angles.



What is the name of the shape you drew?

\_\_\_\_\_

3. Write the names of the shapes on the lines below.



\_\_\_\_\_

\_\_\_\_\_

\_\_\_\_\_