











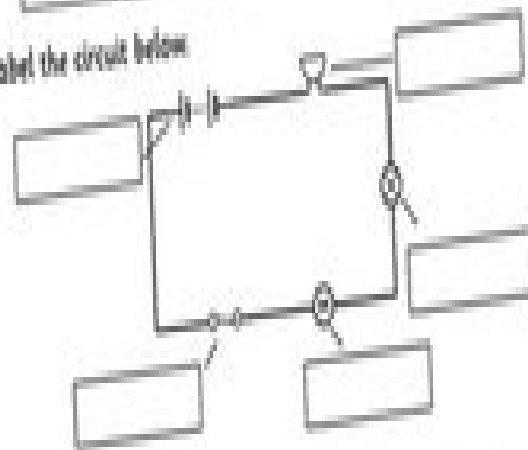
Electric Circuits

Name: _____ Date: _____

Electricity flows in a circuit from the negative pole of a battery to its positive pole. The flow of electricity creates an electric current. There is a symbol to represent each component in an electrical circuit.

				
battery	closed switch	open switch	wire	variable
				
motor	lamp	lamp	motor	wire

Label the circuit below



Complete the sentences.

The electric current leaves the _____ and passes through