




Can you identify each of these 2-shapes? Join the shape to the name.




Square



Equilateral triangle




Isosceles triangle



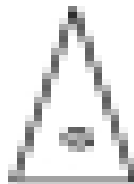
Rectangle



Pentagon



Hexagon



Heptagon



Octagon