





### INSTRUCTIONS FOR COMPLETING "CHICKEN BASKET" WORKSHEETS

- A** Using the "Chicken Basket" menu order board, find the price of each food item on the worksheet.
- B** Write the price of each food item on the worksheet on the blank line to the right of its picture.
- C** Do the math and write the answer by the \$ sign at the bottom of the problem.

Chicken Basket											
<b>CHICKEN</b>				<b>SANDWICHES</b>				<b>PIZZAS</b>			
 4-Piece Chicken Dinner \$4.59	 2-Piece Chicken Dinner \$3.99	 1-Piece Chicken Dinner \$3.49	 Chicken Sandwich \$2.99	 Chicken Sandwich \$2.99	 Chicken Sandwich \$2.99	 Chicken Sandwich \$2.99	 Chicken Sandwich \$2.99	 Chicken Sandwich \$2.99	 Chicken Sandwich \$2.99	 Chicken Sandwich \$2.99	 Chicken Sandwich \$2.99
<b>FAMILY SIZE ORDERS</b>						<b>PIZZAS</b>					
 Family Size Order \$12.99	 Family Size Order \$12.99	 Family Size Order \$12.99	 Family Size Order \$12.99	 Family Size Order \$12.99	 Family Size Order \$12.99	 Family Size Order \$12.99	 Family Size Order \$12.99	 Family Size Order \$12.99	 Family Size Order \$12.99	 Family Size Order \$12.99	 Family Size Order \$12.99
<b>DRINKS</b>						<b>DESSERTS</b>					
 Soft Drink \$.89	 Soft Drink \$.89	 Soft Drink \$.89	 Soft Drink \$.89	 Soft Drink \$.89	 Soft Drink \$.89	 Soft Drink \$.89	 Soft Drink \$.89	 Soft Drink \$.89	 Soft Drink \$.89	 Soft Drink \$.89	 Soft Drink \$.89
 Pudding \$.90	 Pudding \$.90	 Pudding \$.90	 Pudding \$.90	 Pudding \$.90	 Pudding \$.90	 Pudding \$.90	 Pudding \$.90	 Pudding \$.90	 Pudding \$.90	 Pudding \$.90	 Pudding \$.90

Name \_\_\_\_\_ Date \_\_\_\_\_

**A** Fill in the price of each food item. **B** Add the food prices together to find the total cost of the meal.

Chicken Basket	
<input type="checkbox"/> 4-Piece Thighs & Legs Dinner <input checked="" type="checkbox"/> 4-Piece Thighs & Legs Dinner	 \$ <u>4.59</u> <b>B</b>
Soft Drink <input checked="" type="checkbox"/> small <input type="checkbox"/> medium <input type="checkbox"/> large	 <u>.89</u> <b>B</b>
French Fries <input checked="" type="checkbox"/> small <input type="checkbox"/> large	 <u>1.00</u> <b>B</b>
Pudding <input type="checkbox"/> vanilla <input checked="" type="checkbox"/> chocolate	 + <u>.90</u> <b>B</b>
<b>TOTAL</b>	\$ <u>7.38</u> <b>C</b>