

### Finding the Area of Polygons

Squares:

1.  $A =$  \_\_\_\_\_



2.  $A =$  \_\_\_\_\_




Rectangles:

3.  $A =$  \_\_\_\_\_



4.  $A =$  \_\_\_\_\_



Parallelograms:

5.  $A =$  \_\_\_\_\_



6.  $A =$  \_\_\_\_\_




Rhombuses:

7.  $A =$  \_\_\_\_\_



8.  $A =$  \_\_\_\_\_




Triangles:

9.  $A =$  \_\_\_\_\_



10.  $A =$  \_\_\_\_\_



Trapezoids:

11.  $A =$  \_\_\_\_\_



12.  $A =$  \_\_\_\_\_

