

Name _____

Date _____

Area of Circles

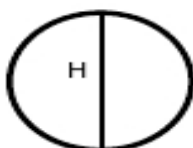
$$\text{Area of a circle} = \pi r^2$$

Assume that $\pi = 3.14$

Find the area for each circle.

Make sure to round your answers to the nearest hundredth.

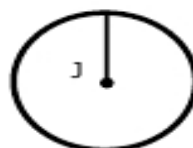
1.



$$H = 22 \text{ ft}$$

Area = _____

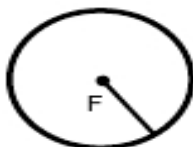
2.



$$J = 8 \text{ ft}$$

Area = _____

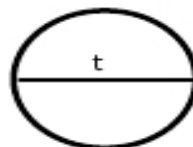
3.



$$F = 21 \text{ m}$$

Area = _____

4.



$$t = 6 \text{ yd}$$

Area = _____

5.



$$Q = 31 \text{ m}$$

Area = _____

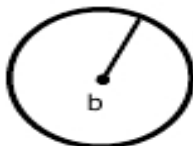
6.



$$i = 14 \text{ yd}$$

Area = _____

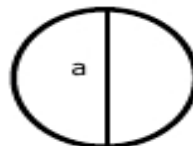
7.



$$b = 19 \text{ m}$$

Area = _____

8.



$$a = 28 \text{ ft}$$

Area = _____