


3RD GRADE DAILY MATH ACTIVITIES

Practice


Draw today's date using numbers.

Area Activity


Fill in the clock face. Today's time is _____.



Today's Temperature is _____.



50° F



100° F

The Percentage of Today's class is _____.

Today's Number Sentences are:

$\underline{\hspace{2cm}}$
 \times
 $\underline{\hspace{2cm}}$

$\underline{\hspace{2cm}}$
 $=$
 $\underline{\hspace{2cm}}$

$\underline{\hspace{2cm}}$
 $+$
 $\underline{\hspace{2cm}}$

$\underline{\hspace{2cm}}$
 $=$
 $\underline{\hspace{2cm}}$

$\underline{\hspace{2cm}}$
 $+$
 $\underline{\hspace{2cm}}$

$\underline{\hspace{2cm}}$
 $=$
 $\underline{\hspace{2cm}}$

$\underline{\hspace{2cm}}$
 $=$
 $\underline{\hspace{2cm}}$

$\underline{\hspace{2cm}}$
 $=$
 $\underline{\hspace{2cm}}$

How many days of school have you completed this school year?

MONTHS	DAYS	TOTAL