





Name _____

Directions: Label each shape with the name of the shape.
Compute the perimeter and the number of lines and vertices.

rectangle octagon heptagon square pentagon triangle trapezoid oval

Shape	Lines	Vertices
		
		
		
		

Shape	Lines	Vertices
