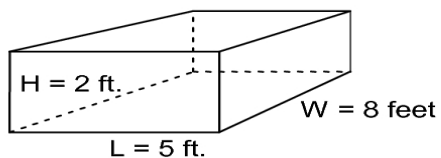


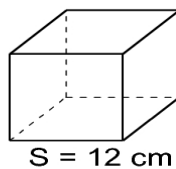
Volume Worksheet I
Find the VOLUME of each of the following Solids

Rectangular Solid



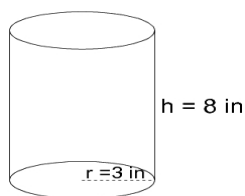
- 1) FORMULA:
 VOLUME =

Cube



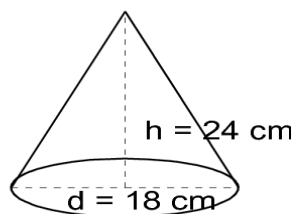
- 2) FORMULA:
 VOLUME =

Cylinder



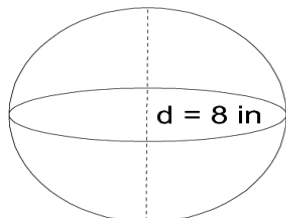
- 3) FORMULA:
 VOLUME =

Cone



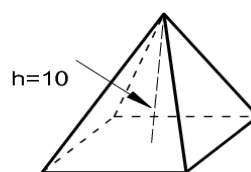
- 4) FORMULA:
 VOLUME =

Sphere



- 5) FORMULA:
 VOLUME =

Square Pyramid



- 6) Formula: $V = \frac{1}{3} \times (\text{Area of Base}) \times \text{height}$
 $L = 8$
 VOLUME =