

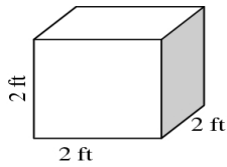
Name \_\_\_\_\_ Period \_\_\_\_\_ Date \_\_\_\_\_

**Volume and Surface Area of Rectangular Prisms and Cylinders**

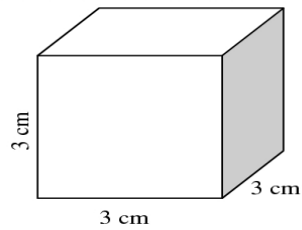
Remember, the volume of a shape is how many cubic units you can fit inside it. What are the areas of the cubes drawn below? Make sure you write the units.

|   |
|---|
| Volume of a Rectangular Prism = _____       |
| Surface Area of a Rectangular Prism = _____ |

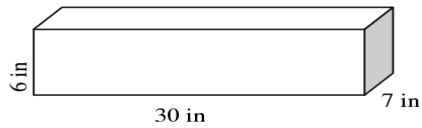
1) Volume = \_\_\_\_\_  
Surface Area = \_\_\_\_\_



2) Volume = \_\_\_\_\_  
Surface Area = \_\_\_\_\_



3) Volume = \_\_\_\_\_  
Surface Area = \_\_\_\_\_



4) Volume = \_\_\_\_\_  
Surface Area = \_\_\_\_\_

