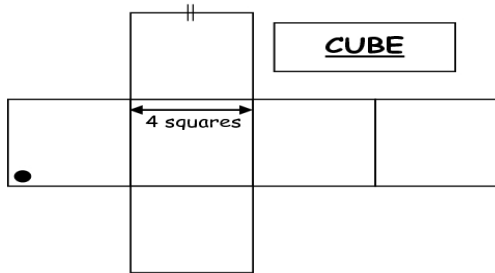
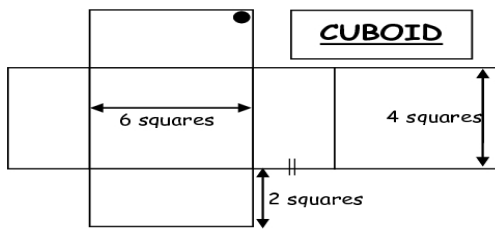


Nets of Solid Shapes



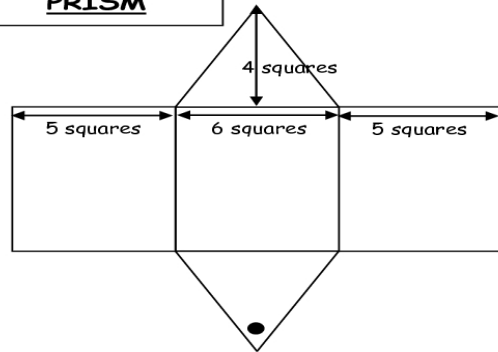
- a) Copy the diagram into your book.
 b) Mark the edge that meets edge Marked with ||.
 c) Mark the two corners which meet with the corner marked with a ●.
 [You can cut the shape out of this piece of paper if this helps.]



- a) Copy the diagram into your book.
 b) Mark the edge that meets edge Marked with ||.
 c) Mark the two corners which meet with the corner marked with a ●.

- a) Copy the diagram into your book.
 b) Mark the edge that meets edge Marked with ==.
 d) Mark the two corners which meet with the corner marked with a ●.

TRIANGULAR PRISM



Draw a net for the following cuboids:

