



## What time is it?


Exercise 1: Write the time shown below each clock.




1. Quarter past 3




2.




3.



4.



5.



6.

Exercise 2: Write the digital times for each.

1. Quarter past 8. \_\_\_\_\_ 8:15
2. Five past 9. \_\_\_\_\_
3. Ten to 4. \_\_\_\_\_
4. Twenty five to 7. \_\_\_\_\_
5. Twenty past 3. \_\_\_\_\_
6. Half past 5. \_\_\_\_\_
7. Quarter to 8. \_\_\_\_\_
8. Twenty to 12. \_\_\_\_\_
9. Ten past 10. \_\_\_\_\_
10. Five to 10. \_\_\_\_\_