

Name : \_\_\_\_\_

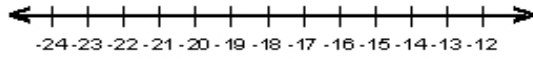
Score : \_\_\_\_\_

Teacher : \_\_\_\_\_

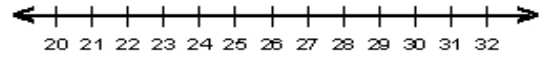
Date : \_\_\_\_\_

### Solve the Inequalities

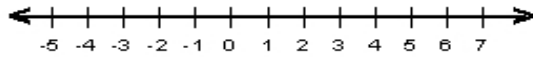
1)  $v + 2 > -19$



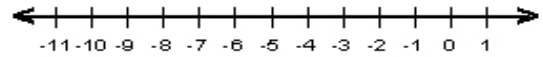
6)  $19 \leq -5 + d$



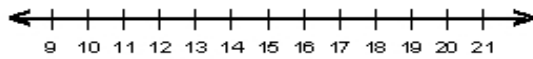
2)  $n - 8 < -8$



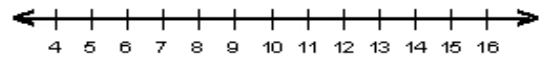
7)  $-16 \leq c - 7$



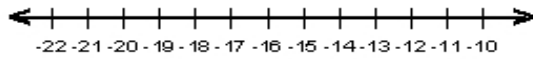
3)  $9 < x - 2$



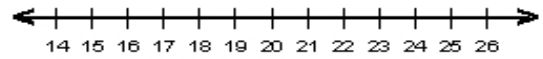
8)  $6 \geq h - 1$



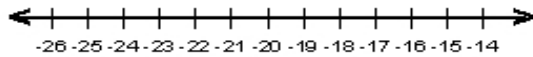
4)  $y + 5 < -13$



9)  $j - 8 > 15$



5)  $5 + g \leq -13$



10)  $5 \geq -9 + w$

