

Name _____

Candy Cane

10 Frames


Directions: Use the ten frames to solve the problems. Draw the missing candy canes.




$7 + \underline{\quad} = 10$




$4 + \underline{\quad} = 10$




$5 + \underline{\quad} = 10$



$9 + \underline{\quad} = 10$



$2 + \underline{\quad} = 10$



$6 + \underline{\quad} = 10$



$8 + \underline{\quad} = 10$



$3 + \underline{\quad} = 10$