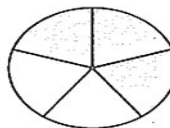


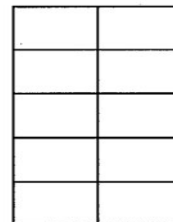
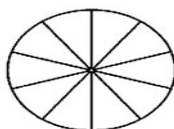



Fractions of shapes



Shade $\frac{3}{5}$ of each shape.



Shade $\frac{4}{5}$ of each shape.



Shade the amount shown of each shape.

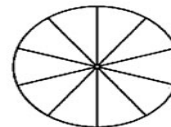
Two-fifths



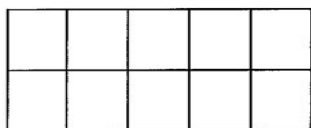
Four-fifths



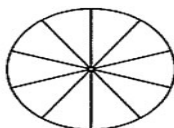
Three-tenths



Seven-tenths



Three-fifths



Nine-tenths

