

Name \_\_\_\_\_

# PIZZA SLICE FRACTIONS


determining fractional parts of a set

Count the slices in each box. Determine the fraction of slices that have pepperoni, olives, mushrooms, and peppers. Record your answers in the space below.

#1

How many slices? \_\_\_\_\_


pepperoni	olives
mushrooms	peppers



#2

How many slices? \_\_\_\_\_


pepperoni	olives
mushrooms	peppers



#3

How many slices? \_\_\_\_\_

pepperoni	olives
mushrooms	peppers



#4

How many slices? \_\_\_\_\_

pepperoni	olives
mushrooms	peppers

