


Name: _____


Decimals and Fractions

Identify decimal model amounts and write equivalent fractions.


Write the decimal and equivalent fraction represented by the model.




7. 0.90 $\frac{9}{10}$




8. _____




9. _____



10. _____



11. _____



12. _____