


Name: \_\_\_\_\_


### Decimals and Fractions

Identify decimal model amounts and write equivalent fractions.


Write the decimal and equivalent fraction represented by the model.




7. 0.90  $\frac{90}{100}$




8. \_\_\_\_\_




9. \_\_\_\_\_



10. \_\_\_\_\_



11. \_\_\_\_\_



12. \_\_\_\_\_