

Name \_\_\_\_\_ Date \_\_\_\_\_

## Doubles Plus One







REMEMBER: if an addend is ONE MORE than the other addend, we know it is a double + 1 fact!

Example:

$$4 + 4 = 8$$

$$4 + 5 = 9 \quad \leftarrow \text{One more!}$$

**Directions:** Use ten frames to solve the problems.

TEN FRAME	DOUBLE	DOUBLE + 1
	$4 + 4 = \underline{\quad}$	$4 + 5 = \underline{\quad}$
	$6 + 6 = \underline{\quad}$	$6 + 7 = \underline{\quad}$
	$3 + 3 = \underline{\quad}$	$3 + 4 = \underline{\quad}$
	$2 + 2 = \underline{\quad}$	$2 + 3 = \underline{\quad}$
	$5 + 5 = \underline{\quad}$	$5 + 6 = \underline{\quad}$
	$7 + 7 = \underline{\quad}$	$7 + 8 = \underline{\quad}$