






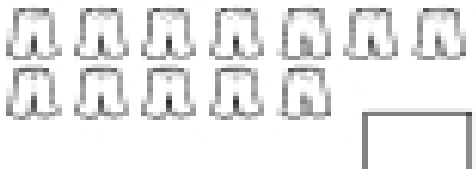
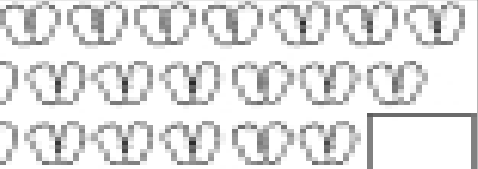



Counting 10–20

Directions: Count how many objects are in each set. Write the number in the box.

<p>1.  <input type="text"/></p>	<p>6.  <input type="text"/></p>
<p>2.  <input type="text"/></p>	<p>7.  <input type="text"/></p>
<p>3.  <input type="text"/></p>	<p>8.  <input type="text"/></p>
<p>4.  <input type="text"/></p>	<p>9.  <input type="text"/></p>
<p>5.  <input type="text"/></p>	<p>10.  <input type="text"/></p>