

Name _____








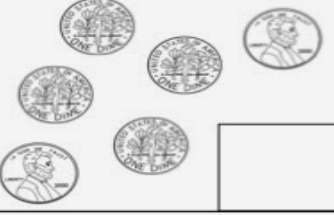
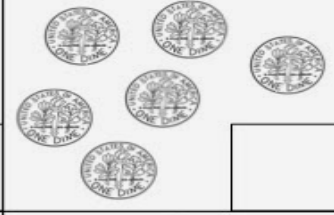



TEKS 2.5A, 2.5B

Date _____

MASTERED _____

Counting Mixed Coins

Count each set of coins.

 <input type="text"/>	 <input type="text"/>	 <input type="text"/>
 <input type="text"/>	 <input type="text"/>	 <input type="text"/>
 <input type="text"/>	 <input type="text"/>	 <input type="text"/>
 <input type="text"/>	 <input type="text"/>	 <input type="text"/>