

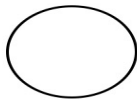
Atomic Structure

Name: _____

Date: _____

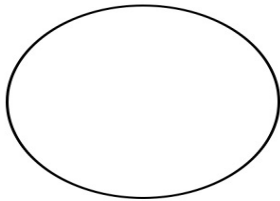
Create the following Bohr models:

1) Hydrogen Atom

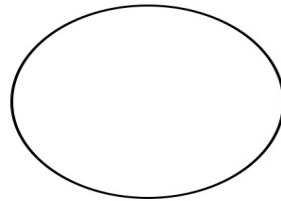


2) Fluorine Atom

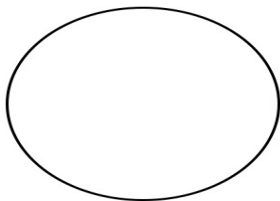
3) Helium Atom



4) Aluminium Atom



5) Helium Atom



6) Argon

