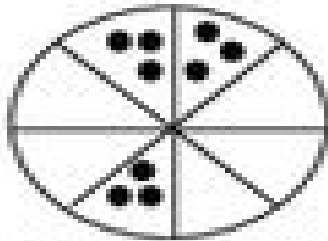



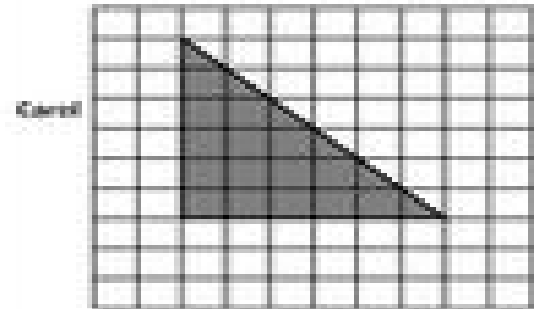
15) The following shows a model of the pizza ordered by the Rodriguez family.



What fraction of the pizza does **NOT** have pepperoni on it?

- A) $\frac{1}{8}$
- B) $\frac{2}{8}$
- C) $\frac{4}{8}$
- D) $\frac{6}{8}$

16) Carol and Thuy both drew a picture as shown below. Which of the following statements compares the area of the two figures correctly?



- F) Carol's figure has greater area than Thuy's figure.
- G) Both figures have exactly the same area.
- H) Carol's figure has an area less than Thuy's figure.
- J) Thuy's figure has an area less than Carol's figure.