


Name: _____

Springtime Bar Graphs and Line Plots


Swimming at the Pool



Use the graph "Swimming at the Pool" to answer the following questions.

1. Who spent the most time at the pool? _____
2. How many more hours did Anne spend at the pool than Maddie? _____
3. How many hours did Tyler and Maddie spend at the pool? _____


Flowers at the Park



Use the graph "Flowers at the Park" to answer the following questions.

4. How many more tulips are at the park than daisies? _____
5. How many flowers are at the park in all? _____
6. How many daisies would there be if the park ranger plants 80 more? _____

Days Spent Playing at the Park



Use the line plot "Days Spent Playing at the Park" to answer the following questions.

7. The line plot shows days children spent playing at the park. How many kids spent 4 or more days playing at the park? _____
8. How many kids spent less than 3 days playing at the park? _____
9. How many kids played at the park in all? _____