

Name : \_\_\_\_\_

Score : \_\_\_\_\_

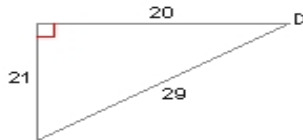
Teacher : \_\_\_\_\_

Date : \_\_\_\_\_

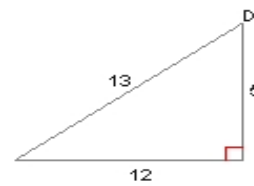
### Inverse Trigonometric Ratios

Find the measure of the indicated angle to the nearest degree.

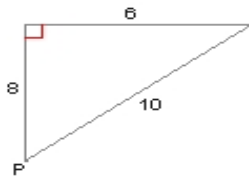
1)  $m\angle D = \underline{\hspace{2cm}}^\circ$



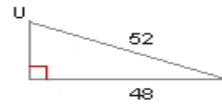
2)  $m\angle D = \underline{\hspace{2cm}}^\circ$



3)  $m\angle P = \underline{\hspace{2cm}}^\circ$



4)  $m\angle U = \underline{\hspace{2cm}}^\circ$



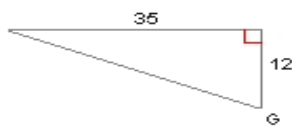
5)  $m\angle O = \underline{\hspace{2cm}}^\circ$



6)  $m\angle G = \underline{\hspace{2cm}}^\circ$



7)  $m\angle G = \underline{\hspace{2cm}}^\circ$



8)  $m\angle N = \underline{\hspace{2cm}}^\circ$

