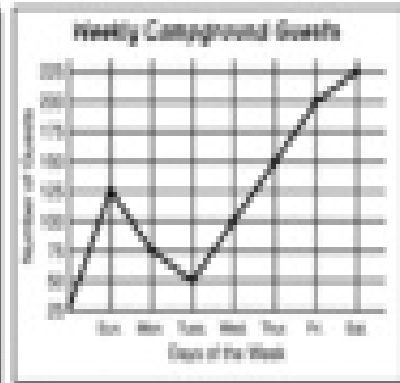
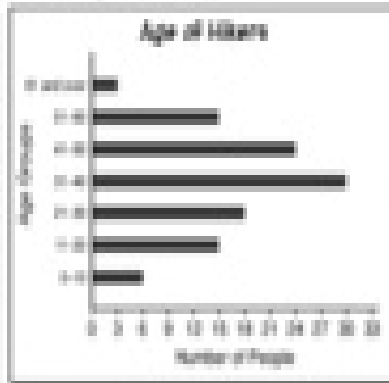



# Hike-a-Lot Campground

Write the name of each type of graph. Then answer the questions.



1. \_\_\_\_\_ 2. \_\_\_\_\_ 3. \_\_\_\_\_

4. Which graph shows data that changes over a period of time? \_\_\_\_\_

5. Which graph compares data for two different groups? \_\_\_\_\_


6. Which graph shows data for a whole group? \_\_\_\_\_

7. What does each type of bar on the graph "Favorite Campfire Food" represent? Explain. \_\_\_\_\_

8. Write a statement that compares two different age groups included in the graph "Ages of Hikers." \_\_\_\_\_

9. Describe the trend of the data on "Weekly Campground Guests." \_\_\_\_\_

10. Which graph do you think is the most interesting? \_\_\_\_\_



**Bonus** If you made a graph about the different colored tents at Hike-a-Lot Campground, what type of graph would you use? Explain.