

Name : \_\_\_\_\_

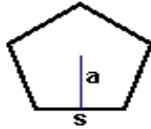
Score : \_\_\_\_\_

Teacher : \_\_\_\_\_

Date : \_\_\_\_\_

**Identify and Calculate the Area and Perimeter for each Polygon.**

1)



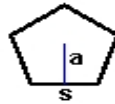
$s = 6.8 \text{ mm}$   
 $a = 3.23 \text{ mm}$

Area: \_\_\_\_\_

Perimeter: \_\_\_\_\_

Type: \_\_\_\_\_

2)



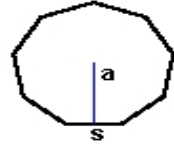
$s = 5.1 \text{ ft}$   
 $a = 2.43 \text{ ft}$

Area: \_\_\_\_\_

Perimeter: \_\_\_\_\_

Type: \_\_\_\_\_

3)



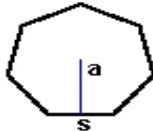
$s = 3.3 \text{ ft}$   
 $a = 1.65 \text{ ft}$

Area: \_\_\_\_\_

Perimeter: \_\_\_\_\_

Type: \_\_\_\_\_

4)



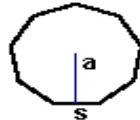
$s = 3.1 \text{ yds}$   
 $a = 1.55 \text{ yds}$

Area: \_\_\_\_\_

Perimeter: \_\_\_\_\_

Type: \_\_\_\_\_

5)



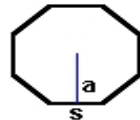
$s = 2.7 \text{ inches}$   
 $a = 1.35 \text{ inches}$

Area: \_\_\_\_\_

Perimeter: \_\_\_\_\_

Type: \_\_\_\_\_

6)



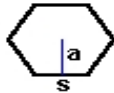
$s = 6 \text{ mm}$   
 $a = 2.6 \text{ mm}$

Area: \_\_\_\_\_

Perimeter: \_\_\_\_\_

Type: \_\_\_\_\_

7)



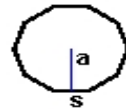
$s = 5 \text{ yds}$   
 $a = 2.5 \text{ yds}$

Area: \_\_\_\_\_

Perimeter: \_\_\_\_\_

Type: \_\_\_\_\_

8)



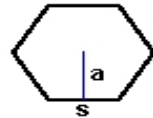
$s = 2.4 \text{ cm}$   
 $a = 1.2 \text{ cm}$

Area: \_\_\_\_\_

Perimeter: \_\_\_\_\_

Type: \_\_\_\_\_

9)



$s = 6.7 \text{ inches}$   
 $a = 3.35 \text{ inches}$

Area: \_\_\_\_\_

Perimeter: \_\_\_\_\_

Type: \_\_\_\_\_