

Name: _____

Name:
Name: _____

Hour:
Hour: _____

Date:
Date: _____




Chemistry: Molar Mass and Percentage Composition

Calculate the molar masses and percentage composition of each of the following compounds. Show your work and

include units.

always include units.

1. CaCO_3



2. Ca(OH)_2

