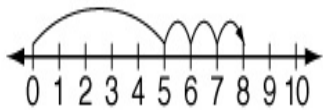


Writing a number sentence from a number line

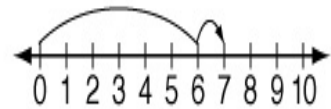


What is the number sentence that matches this number line?

$5 + 3 = 8$

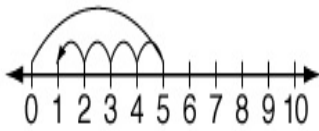
Show on the number line.

$6 + 1 = 7$



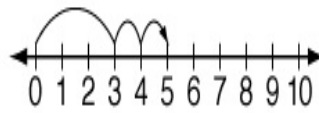
For each number line given, write the number sentence and answer it.

1



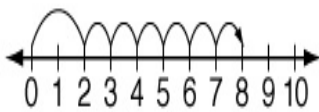
$5 - 4 = 1$

2



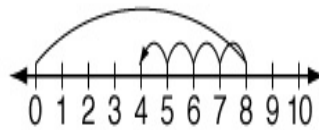
$3 + 2 = 5$

3



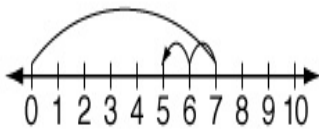
$2 + 6 = 8$

4



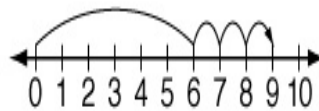
$8 - 4 = 4$

5




$7 - 2 = 5$

6



$6 + 3 = 9$



65

Miko drew 3 pictures and colored 2 more. How many pictures did she make in all?

$3 + 2 = 5$

5 pictures

$$\begin{array}{r} 5 \\ + 9 \\ \hline 14 \end{array}$$

$$\begin{array}{r} 40 \\ + 5 \\ \hline 45 \end{array}$$