

Name _____

Subitizing Time
Time to the hour

Write Time


 Draw the hour hand to show the correct time.



5:00




1:00



10:00



9:00



3:00




11:00




7:00



6:00



8:00



2:00