




Name: \_\_\_\_\_


### Subtracting up to 10


Subtract and write the correct number in the box.

	$\begin{array}{r} 7 \\ - 4 \\ \hline \end{array}$ <p>...</p>
--	--

	$\begin{array}{r} 7 \\ - 5 \\ \hline \end{array}$ <p>...</p>
--	--

	$\begin{array}{r} 8 \\ - 3 \\ \hline \end{array}$ <p>...</p>
--	--

	$\begin{array}{r} 8 \\ - 4 \\ \hline \end{array}$ <p>...</p>
--	--

	$\begin{array}{r} 9 \\ - 1 \\ \hline \end{array}$ <p>...</p>
---	--