





















Name: \_\_\_\_\_

## Counting by 5's to 100

**Directions:** Count by 5's, and write the missing numbers in the blanks below the nickels.

				
_____ ¢,	10¢,	15¢,	_____ ¢,	25¢
				
5¢,	_____ ¢,	15¢,	_____ ¢,	_____ ¢,
				
5¢,	_____ ¢,	_____ ¢,	_____ ¢,	_____ ¢,
				
_____ ¢,	_____ ¢,	_____ ¢,	_____ ¢,	_____ ¢,