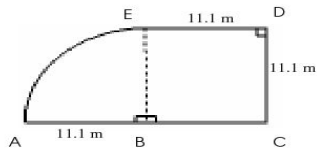


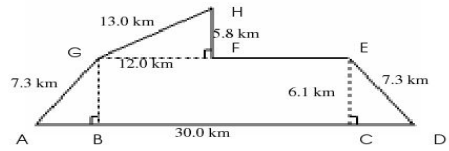
## Area and Perimeter of Compound Shapes (J)

Instructions: Find the area and perimeter of each compound shape.

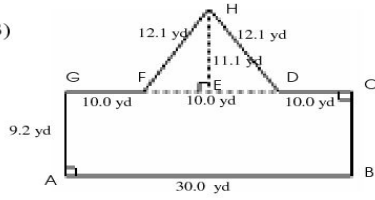
1)



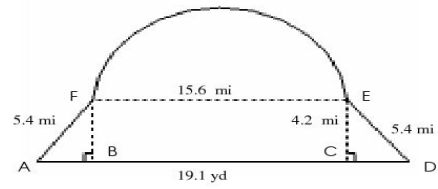
2)



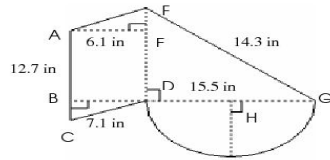
3)



4)



5)



6)

