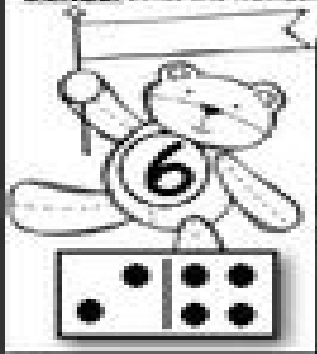

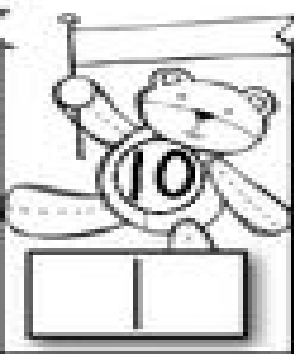
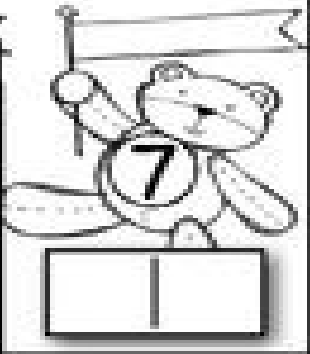



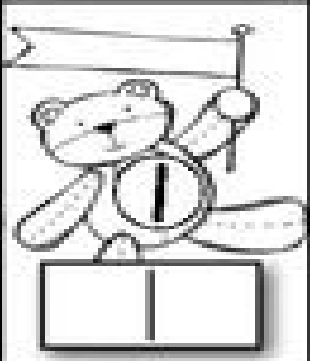
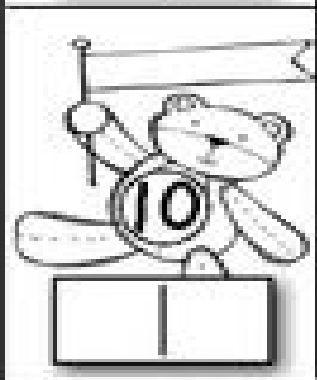


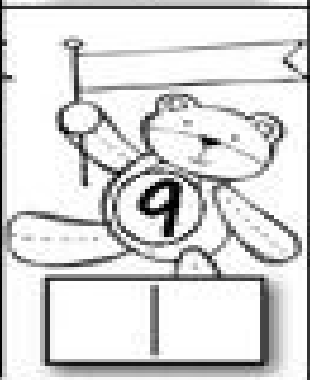


NAME _____

Valentine Bears On Parade

DIRECTIONS: Look at the bear's number. Draw dots on the domino to show a way to make that number.
EXAMPLE: Write the number sentence in the flag.

 <p>6</p> <p>1 5</p>	 <p>4</p> <p> </p>	 <p>10</p> <p> </p>	 <p>7</p> <p> </p>
 <p>3</p> <p> </p>	 <p>8</p> <p> </p>	 <p>5</p> <p> </p>	 <p>1</p> <p> </p>
 <p>10</p> <p> </p>	 <p>2</p> <p> </p>	 <p>6</p> <p> </p>	 <p>9</p> <p> </p>