

Name : \_\_\_\_\_

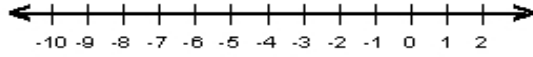
Score : \_\_\_\_\_

Teacher : \_\_\_\_\_

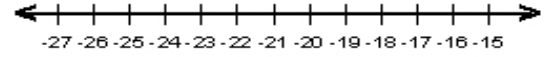
Date : \_\_\_\_\_

### Solve the Inequalities

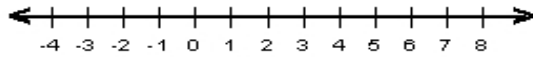
1)  $-5 + \frac{a}{4} \leq -7$



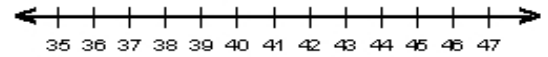
6)  $-7 > 3 + \frac{g}{2}$



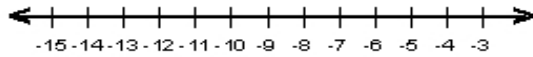
2)  $2d + 5 < 15$



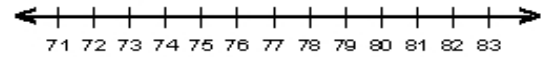
7)  $7 < -6 + \frac{x}{3}$



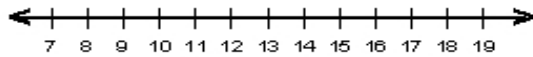
3)  $20 \geq 5 - 3r$



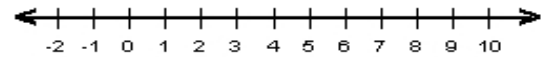
8)  $-6 + \frac{5t}{6} \geq 10$



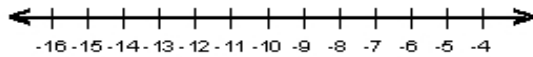
4)  $3 + 6f > 69$



9)  $2c + 4 \leq 14$



5)  $61 \leq -5k + 6$



10)  $-8 < -2n + 4$

