

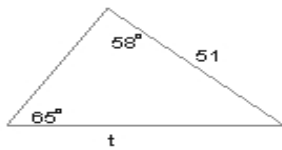
Name : \_\_\_\_\_ Score : \_\_\_\_\_

Teacher : \_\_\_\_\_ Date : \_\_\_\_\_

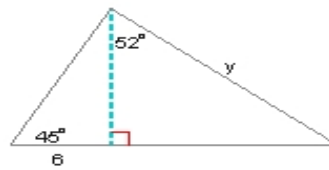
### Multi-Step Problems

Find the variable side. Round the intermediate and final values to the nearest tenth.

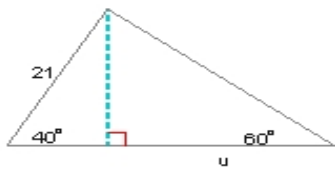
1)  $t =$  \_\_\_\_\_



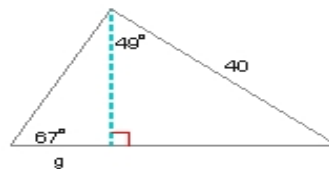
2)  $y =$  \_\_\_\_\_



3)  $u =$  \_\_\_\_\_

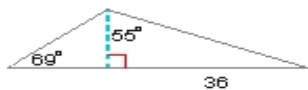


4)  $g =$  \_\_\_\_\_



Find the area of each triangle. Round the intermediate and final values to the nearest tenth.

5) Area = \_\_\_\_\_



6) Area = \_\_\_\_\_

