

3-4

NAME _____

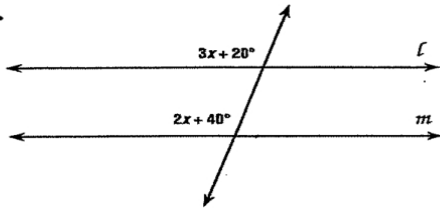
DATE _____

Practice Worksheet

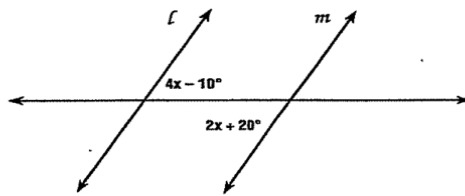
Proving Lines Parallel

For exercises 1 to 6, find the value of x so that $l \parallel m$.

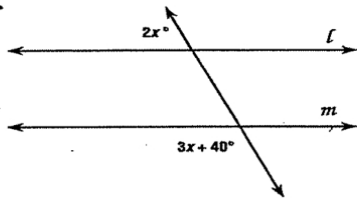
1.



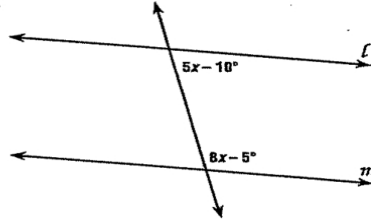
2.



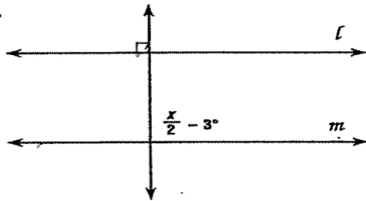
3.



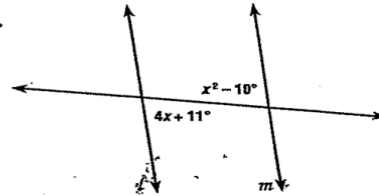
4.



5.



6.



7. If $l \parallel m$, can $x = 50$? Justify your answer.

8. Find $m\angle 1$ for the figure at the right.

