


Name: _____ Date: _____ Period: _____

Trapezoids Worksheet

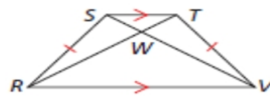
1. In trapezoid PRSV, name the bases, the legs, and the midsegment.




2. Find $m\angle A$



3. $RW = 17.7, SV = 23.3$; find TW .



4. Find the value of z so that EFGH is isosceles.



5. $MQ = 7y - 6, LP = 4y + 11$; find the value of y so that LMPQ is isosceles.



6. Find QR.

